

260316

NASC1226

प्रथम वर्ष/सेमिस्टर - II / AEC- हिंदी भाषा : कौशल के
आधार (Language Skill in Hindi)

समय : 01 घंटे

अंक : 30

सूचना: 1) प्रश्न क्रमांक 1 से 6 में से किन्हीं 4 प्रश्नों के उत्तर लिखिए

(Attempt any four out of six questions)

2) सभी प्रश्नों को समान अंक हैं।

प्रश्न 1. भाषा कौशल का अर्थ समझाकर वाचन कौशल की विधियाँ लिखिए ?

प्रश्न 2. शिक्षा के क्षेत्र में लेखन कौशल का महत्व बताकर उनकी विशेषताएं लिखिए?

प्रश्न 3. वाचन कौशल के अर्थ, स्वरूप और महत्व को विश्लेषित कीजिए ?

प्रश्न 4. भाषा कौशल का अर्थ बताकर उनके प्रकारों पर विस्तृत चर्चा कीजिए ?

प्रश्न 5. शिक्षा के क्षेत्र में श्रवण कौशल का महत्व बताकर उनकी विशेषता लिखिए ?

प्रश्न 6 प्रभावी संवाद में भाषण और श्रवण कौशल की भूमिका का वर्णन कीजिए ?

.....

260316

AEC- URDU

NASC/226

Urdu Communication Skill-I

(Semester- II)

Timing: 01: Hours

Marks: 30

ہدایات:

ہر جواب سے پہلے متعلقہ سوال ضرور نقل کریں۔
سبھی سوالات کے نمبر مساوی ہیں۔

10

سوال نمبر 1:

املا کی اہمیت اور اس کے ادبی اثرات پر روشنی ڈالیے۔

یا

لہجہ اور تلفظ کی درست گفتگو کو کس طرح موثر بناتی ہے؟ وضاحت کیجیے۔

10

سوال نمبر 2:

رموزِ اوقاف کی اہمیت بیان کرتے ہوئے مثالیں دیجیے۔

یا

(ب) قواعد کی ضرورت و افادیت پر مختصر مگر جامع نوٹ لکھیے۔

10

سوال نمبر 3:

مندرجہ ذیل میں سے کسی دو پر مختصر نوٹ لکھیے:

(الف) زبانی مواصلات کی خصوصیات

(ب) غیر زبانی مواصلات کی اہمیت

(ج) موثر گفتگو کے اصول

260318

RIZVI EDUCATIONS SOCIETY'S

NASC 1226

RIZVI COLLEGE OF ARTS, SCIENCE & COMMERCE, BANDRA(W), MUMBAI

NEP – 2020 – END OF SEMESTER EXAMINATION – A / Y : 2025 – 26

Paper : FOUNDATION AND EXPLORATION OF PERFORMING AND FINE ARTS
Credits : 02 **Max Marks : 30** **Max Time : 1 hr**
Class : FYBA / BSC / BCOM / BMS / BBI / BAF / BAMMC / CS / IT **SEM : II**

Q.1. Multiple Choice Questions : [06]

1. The ancient Indian treatise on performing arts, "Natya Shastra," was articulated by _____.
(Kalidasa, Sage Bharata, Tulsidas)
2. _____ is NOT a primary element of performing arts as per the foundation modules.
(Digital Marketing, Abhinaya, Raga)
3. The traditional folk dance "Lavani" belongs to _____.
(Punjab, Gujarat, Maharashtra)
4. _____ civilization is credited for the earliest roots of Indian artistry.
(Indus Valley, Roman, Egyptian)
5. Modern Indian performing arts that blend traditional forms with global influences is known as _____.
(Ritualistic Arts, Ancient Arts, Fusion Arts)
6. The career path specifically mentioned under Performing Arts is _____.
(Chemical Engineering, Script Interpretation and Scene Study, Civil Services)

Q2. Attempt any 2 out of 4 (3 marks each) [06]

1. Define "Natya" as per the ancient Indian traditions.
2. Briefly explain the role of Rhythm (Tala) and Melody (Raga) in a performance.
3. How do performing arts act as a vehicle for Spiritual Connection?
4. State the importance of Voice Modulation in enhancing a performance.

Q3. Attempt any 2 out of 4 (3 marks each) [06]

1. What is the significance of Character Development in drama?
2. Briefly explain the concept of Improvisation Skills for an artist.
3. Define Emotional Exploration and its role in "Abhinaya" (expression).
4. List two career options available specifically in the field of Performing Arts.

Q4. Attempt any 2 out of 4 (3 marks each) [06]

1. Describe the impact of aesthetic art on Sacred Architecture (temples/monuments).
2. Name and briefly describe any two Folk or Tribal art forms of India.
3. Why is the Revival and Preservation of ancient Indian art necessary today?
4. How did the Indus Valley Civilization contribute to the early foundations of Indian art?

Q5. Attempt any 2 out of 4 (3 marks each) [06]

1. Discuss one major Modern Trend currently seen in Indian Art.
2. Name two Eminent Contemporary Artists of India.
3. Explain how Digital Platforms have created new opportunities for modern artists.
4. Identify three diverse Career Options in Fine Arts.

260318

Programme Name (With Year): FY-DLLE

NASC/226

Semester: II

Max Time: 01 hour

Max Marks: 30

Title of the paper : Extension Work

Credits: 02

1. Fill in the blanks by choosing correct alternative given in the bracket. (6 Marks)

- i) _____ is a basic consumer right. (Right to vote / Right to choose)
- ii) Awareness and education together create a _____ society. (careless / progressive)
- iii) An old age home is a place where _____ (children study /old people live and get care)
- iv) Sunita Williams is famous for her work as a/an _____ (doctor / astronaut)
- v) Education helps women become more _____ (silent / confident)
- vi) In the Vedic Period, women were given _____ (no rights /equal respect and education)

2. Write short notes on any two of the following. 6 marks

- i) Impact of child labour on the health of children.
- ii) Position of women in Vedic period.
- iii) Basic consumer rights under the Consumer Protection Act 2019.
- iv) Achievements of women in India and mention any two famous personalities.

3. Answer in detail on any three of the following. 18 marks

- i) Causes of child labour.
- ii) Notable Indian women achievers.
- iii) Definition and benefits of old age homes.
- iv) Rights of Consumers under the Consumer Protection Act,2019.
- v) Current status of women in India.

THE END

2-60318

RIZVI COLLEGE OF ARTS , SCIENCE AND COMMERCE

NASC1226

NSS

FYBCOM Sem-II

Duration:1 hour

Max marks:30

Q1. Rewrite the following by choosing the correct options given below

(6 marks)

1. What is the main focus of SDG 17?

- a) Partnerships for the Goals
- b) Peace, Justice, and Strong Institutions
- c) Reduced Inequalities
- d) Sustainable Cities and Communities

2. Socio-economic survey is conducted to understand:

- a) Weather conditions
- b) Social and economic conditions
- c) Student attendance
- d) Exam pattern

3. Which of the following is a key recommendation for promoting partnership?

- a) Foster global cooperation
- b) Drive transitions in key sectors
- c) Engage stakeholder
- d) All of the above

4. Nature camp helps in promoting:

- a) Environmental awareness
- b) Computer skills
- c) Office work
- d) Exam preparation

5. Which value is essential for fostering individual growth?

- a) Responsibility
- b) Gratitude
- c) Critical thinking
- d) All of the above

6. Environmental education mainly teaches about:

- a) Business laws
- b) Protection of environment
- c) Banking system
- d) Taxation

Q2. Write Short Notes (Any 2 out of 4)

(6 marks)

1. Financial literacy in Slums
2. Tree Plantation Drive (purpose, activities)
3. Importance of Ethics for Youth
4. Objectives of Camp in Rural Areas

Q3. Answer the following (Any 3 out of 5)

(18marks)

1. What are the activities Conducted in Personality Development?
2. Explain Shramdaan and its significance in Social development.
3. Define leadership and explain the qualities of good leader.
4. Explain the following in relation to conducting a Rally-
 - (a) Objectives and Theme of a Rally
 - (b) Planning Rally
5. Explain the steps involved in organising Blood donation camp?

NCC

260318

[Time : One Hour]

NABC1226

[Marks : 30]

- NB :
1. Attempt any Three Questions
 2. All questions carry equal marks.
 3. Figures to the right indicate maximum marks.

1. Answer any two of the following [10]
 - 1) What is Magnetic Variation (Declination), and why is it important for navigation?
 - 2) Explain the concept of a grid reference and the specific steps required to interpret a six-digit grid reference on a map?
 - 3) What is the definition of scale, and what are the different ways it can be displayed or communicated on a map?

 2. Answer any two of the following [10]
 - 1) What are the key elements of a successful Public Speaking?
 - 2) What are the "Dos and Don'ts" of a Group Discussion?
 - 3) Identify four Leadership Traits that contribute most to team morale.

 3. Can you describe your journey in the NCC and share the key lessons or skills you gained from it? [10]
-

BACHELOR OF BANKING AND INSURANCE (BBI)

END OF SECOND SEMESTER EXAMINATION MARCH 2026

MAJOR: MANAGEMENT PROCES AND ORGANIZATIONAL BEHAVIOR

NB: (a) Attempt Any 4 out of 6

DURATION: 2 Hrs

(b) Figures to the right indicate full marks.

MARKS: 60

Q.1 Answer the following (15 Marks)

- a) Why does social loafing occur? (07 marks)
- b) How can social loafing be reduced? (08 marks)

Q.2 Answer the following (15 Marks)

- a) Describe the elements that contribute to the development of high-performance teams in an organization. (07 marks)
- b) Explain how these elements improve team effectiveness. (08 marks)

Q.3 Answer the following (15 Marks)

- a) State the meaning of Transactional Analysis. (07 marks)
- b) Explain the life positions in Transactional Analysis. (08 marks)

Q.4 Answer the following (15 Marks)

- a) Mention the meaning of management. (07 marks)
- b) Explain the managerial skills and managerial roles. (08 marks)

Q.5 Answer the following (15 Marks)

- a) State the definition of a leader. (07 marks)
- b) List and explain the different functions of a leader. (08 marks)

Q.6 Answer the following (15 Marks)

- a) Clarify the meaning of decision-making. (07 marks)
- b) Interpret the process of decision-making. (08 marks)

B.COM. (BANKING AND INSURANCE)

END OF SECOND SEMESTER EXAMINATION MARCH 2026

MAJOR: Fundamental Accounting -II

DURATION: 1 Hr.

Marks: 30 Marks

- NB:** (a) Attempt any 2 out of 3.
(b) Figures to the right indicate full marks.
(c) Use of simple calculator is allowed.

Q1. A) The following information relates to a ABC Ltd:

(8)

- Capital employed in the business: ₹5,00,000
- Normal rate of return: 10%
- Profits of the last four years:

2021: ₹90,000

2022: ₹1,10,000

2023: ₹1,30,000

2024: ₹1,20,000

Calculate the value of **Goodwill** on the basis of **3 Years' Purchase of Super Profits**.

Q1. B) The Balance Sheet of XYZ Ltd. as on 31st March 2025 is as follows:

(7)

Liabilities

- Equity Share Capital (10,000 shares of ₹10 each) – ₹1,00,000
- 12% Preference Share Capital – ₹50,000
- General Reserve – ₹30,000
- Profit & Loss A/c – ₹20,000
- Creditors – ₹40,000

Assets

- Land & Building – ₹80,000
- Plant & Machinery – ₹60,000
- Stock – ₹40,000
- Debtors – ₹30,000
- Cash – ₹10,000
- Goodwill – ₹20,000

Additional Information:

1. Land & Building is revalued at ₹1,00,000.
2. Plant & Machinery is valued at ₹80,000.
3. Stock is valued ₹50,000.

Fund. Acc.

4. Goodwill is to be written off.
5. The company maintains a dividend of ₹1,50,000 annually.
6. Normal rate of return is 15%.

You are required to Calculate the value of Equity Shares by Intrinsic Value Method.

Q2. A) ABC Ltd. has the following balance as on 31st March 2025: (7)

- 10% Preference Share Capital (5,000 shares of ₹100 each) – ₹5,00,000
- Equity Share Capital (₹10 each) – ₹8,00,000
- General Reserve – ₹2,00,000
- Securities Premium – ₹50,000
- Profit & Loss A/c – ₹1,50,000

The company decides to redeem the preference shares at a premium of 10%.

For this purpose:

- It issues 20,000 Equity Shares of ₹10 each at par.
- The entire amount is received in cash.

You are required to pass necessary Journal Entries in the books of the company.

Q2. B) ZMR Ltd. had a balance of ₹ 55,00,000 in its Profits and Loss Account. Instead of declaring a dividend it decided to redeem its ₹ 50,00,000; 8% Debentures at a premium of 10%. Pass the necessary Journal Entries in the books of the company for the redemption of debentures. (8)

Q3. Write Short Notes: (15)

1. Capitalization Method of Goodwill
 2. Fair Value of Shares
 3. Capital redemption Reserve
-

**FIRST YEAR B.COM (BANKING AND INSURANCE)
END OF SEMESTER EXAMINATION MARCH 2026**

MINOR: INTRODUCTION TO BUSINESS

**DURATION: 1 Hr.
MARKS: 30**

NOTE: ALL QUESTIONS CARRY EQUAL MARKS.

ATTEMPT ANY TWO QUESTIONS OUT OF THREE.

Q.1.A. ATTEMPT ANY TWO QUESTIONS OUT OF THREE. [15M]

- a) Distinguish between Economic Objectives and Social Objectives of business.
- b) Explain the importance of Corporate Social Responsibility (CSR) in business.
- c) Point out the problems faced by Women Entrepreneurs.

Q.2.A. ATTEMPT ANY TWO QUESTIONS OUT OF THREE. [15M]

- a) What promotional measures are available for Women Entrepreneurs?
- b) What is a Project Report? State its contents.
- c) Define Business Environment and state its importance.

Q.3. A. Attempt any One questions out of Two [5M]

- a) Distinguish between Project report and Feasibility Report.
- b) Explain the different types of Feasibility Study.

Q.3. B. Attempt Case Study: [10M]

CASE STUDY – ORIENTATIONS OF INTERNATIONAL MARKETING

GUTS TO BUY:

India is an emerging economy that is giving birth to new multinationals. Almost all the big global strides of corporate India have been made through acquisitions, most of them friendly. Big deals like Tata Steel – Corus (\$12.2 billion), Hindalco – Novelis (\$6 billion), Suzlon Energy – RePower (\$1.35 billion) spring to mind immediately. Corporate India has shown two things – guts to buy and the dexterity to integrate in order to squeeze the maximum value out of the acquisitions.

This is where Indian companies are doing something unique rather than bulldoze their way to seize control of their trophies, they are taking a “soft-touch” approach to integration. Indian acquirers have not fired CEOs, shut down plants, laid off workers and have not shipped jobs

Int. to Business

back to India. This approach is best illustrated by most of Tata Group acquisitions – nowhere has Tata tried to impose its culture or people on the acquired companies. Bharat Forge still remains the top management and Suzlon's Tulsi Tanti has demonstrated remarkable restraint in managing Hansen Transmission, Belgian gearbox maker. Foreign companies favour Tata to take over their business.

Questions:

- (1) "The boat is yet to be rocked in any of corporate India's major global acquisitions." Explain the statement.
- (2) Identify the reasons for successful acquisitions by Indian companies

**FIRST YEAR B.COM (BANKING AND INSURANCE)
END OF SEMESTER EXAMINATION MARCH 2026**

OE I: FINANCIAL MATHEMATICS II

**DURATION: 1 Hr.
MARKS: 30**

**NOTE: ALL QUESTIONS CARRY EQUAL MARKS.
ATTEMPT ANY TWO QUESTIONS OUT OF THREE.**

Q.1.A. ATTEMPT ANY THREE QUESTIONS OUT OF FOUR. [15M]

- a) By investing Rs.7500 in shares of a company that paid 10% dividend an income of Rs. 500 was received as dividend. What was the price paid for each of Rs. 100 shares?
- b) Find the trend values using the method of moving averages. Use four yearly moving averages.

Year	2001	2002	2003	2004	2005	2006	2007	2008	2009	2010	2011
Sales in '000' Rs.	13	15	19	21	27	35	47	47	49	50	51

- c) Mr. Chopra bought 400 shares of par value Rs.10 each at the market price of Rs.24 each. If the annual dividend distribution was at the rate of 12%. Find Mr. Chopra rate of return on investment.
- d) Find the trend line for the 4 yearly following data:

Year	2001	2002	2003	2004	2005	2006
Yield million tonnes	310	328	341	361	383	407

Q.2.A. ATTEMPT ANY THREE QUESTIONS OUT OF FOUR. [15M]

- a) Find Laspeyre's and Paasche's Number from the following data for the year 1995 with base 1990.

Commodity	Price in Rs.		Quantity	
	1990	1995	1990	1995
A	10	12	20	22
B	13	13	23	24
C	16	18	20	18
D	20	18	5	6
E	18	20	7	8

- b) Navneet Education Ltd. issued some shares of face value Rs. 10 each. A dividend of Rs. 7500 was declared by the company at 2.5% per share. Find the number of shares issued by the company.

- c) Mr. David invested Rs. 50000 in the purchase of a mutual fund unit at an N.A.V. Rs. 1650. Calculate the number of units purchased when the entry load of 1.2% was applied. How many more units could he have purchased if the schemes were load free?
- d) For the following data fit a straight-line trend.

Year	2000-01	2001-02	2002-03	2003-04	2004-05	2005-06	2006-07
Milk production million tonnes	80.6	84.4	86.2	88.1	92.5	97.1	100.9

Q.3. A. ATTEMPT ANY THREE QUESTIONS OUT OF FOUR. [15M]

- a) Ms. Sonia Rajput had 600 preference shares and 400 ordinary shares of Reli Company of Rs. 10 each. The company declared a 10% annual dividend on the preference shares and a 12% annual dividend on the ordinary shares. What was the total annual dividend received by Ms. Rajput?
- b) Calculate Marshall- Edgeworth Index Number and Dorbish – Bowley Index Number for the following data.

Commodity	2004		2005	
	Price	Quantity	Price	Quantity
P	8	50	10	45
Q	15	8	22	8
R	13	30	18	30
S	16	40	22	35

- c) By investing Rs. 8500 shares of company that paid 10% dividend an income od Rs. 600 was received as dividend. What was the price paid for each of Rs. 100 shares.
- d) For the following data find Fisher's Index Number.

Commodity	Base Year		Current Year	
	Price	Quantity	Price	Quantity
W	8	20	10	22
X	9	15	10	20
Y	7	18	11	15
Z	10	6	15	6

OE II: LOGIC AND DATA INTERPRETATION II

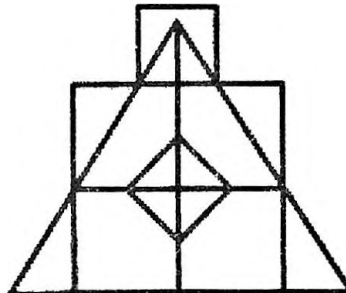
DURATION: 1 Hr.
MARKS: 30

NOTE: ALL QUESTIONS CARRY EQUAL MARKS.
ATTEMPT ANY TWO QUESTIONS OUT OF THREE.

Q.1.A. ATTEMPT ANY THREE QUESTIONS OUT OF FOUR.

[15M]

- a) If January 1st, 2023, is a Sunday, what day of the week will October 31st, 2023?
- b) Find the number of triangles and squares in the given figure.



- c) At what time between 5 and 6 o'clock, do the minute and hour hands make an angle of 34 degree with each other.
- d) The table below shows the number of books sold by a bookstore over five months.

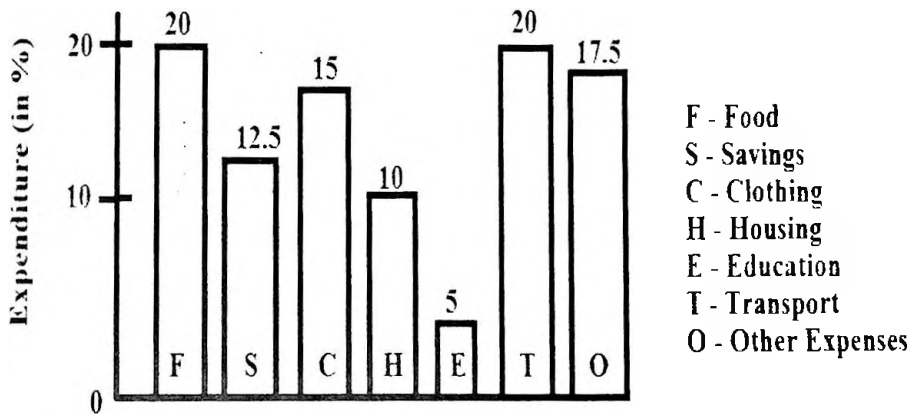
Month	Number of books sold
June	120
July	150
August	180
September	210
October	240

1. What is the average number of books sold per month over the five-month period?
2. By what percentage did book sales increase from June to October?
3. If the trend continues how many books are expected to be sold in November?

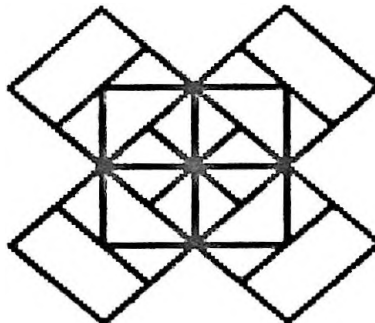
Q.2.A. ATTEMPT ANY THREE QUESTIONS OUT OF FOUR.

[15M]

- a) Among 40 food and agricultural Management students at IIMA 32 students take up “Food supply Chain Management” elective, 28 take up “Rural Marketing” elective and 26 take up “Agri finance” elective. All students have to take up at least one of the three electives. What is the maximum number of students that could have taken all three electives?
- b) Study the following bar graph and answer the questions that follow: Total monthly income Rs. 50000



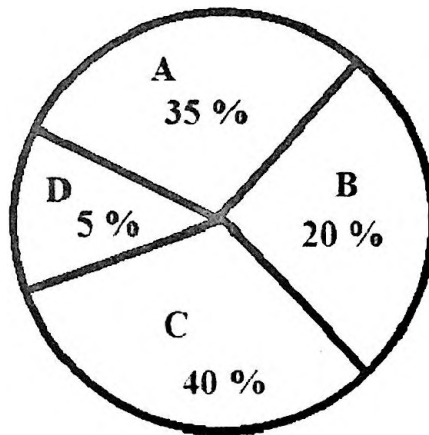
1. What amount is spent on education?
 2. How much more is spent on clothing and food together than on transportation?
 3. What percent of the amount on housing is spent on education?
- c) How many times in a day the two hands of a clock coincide?
- d) Count the number of squares in the given figure.



- a) The following table contains the data on train arrival and train departure from a station. Study the table and answer the questions that follow:

Delay	No. of Arrivals	No. of Departure
0	1250	1400
0-30	114	82
30-60	21	5
>60	5	3
Total	1400	1490

1. Find the number of trains that arrived late
 2. Find the number of trains that departure late
 3. Find the percentage of late arriving trains
- b) At what time between 12 PM and 1 PM would the two hands of the clock be together?
- c) If 1st January 2000 was a Saturday, what day of the week was 1st January 2010?
- d) Study the pie chart below and answer the questions that follow :



The above pie chart shows the sales of four different types of articles in a shop.

1. What is the central angle of type A?
2. If the total sale is 1200, what is the sale of B?
3. What is the difference between the central angle of C and D?

B.COM. (BANKING AND INSURANCE)

END OF SECOND SEMESTER EXAMINATION MARCH 2026

VSC: Forex

DURATION: 1 Hr.

Marks: 30 Marks

- NB:** (a) Attempt any 2 out of 3.
(b) Figures to the right indicate full marks.
(c) Use of simple calculator is allowed.

Q1.A) The following quote is given by a bank: (8)

USD 1 = JPY 155.8420 / 155.9120

- Identify the name of the Country where it is Direct Quote.
- Calculate Mid-Rate.
- Calculate Spread.
- Calculate Spread %.
- Find the Inverse Quote

Q1.B) Calculate the Cross Currency Rate from following: (7)

	BID	ASK
USD INR	91.2050	91.2850
GBP USD	1.2750	1.2810
USD CHF	0.9020	0.9070

**Find: a) GBP INR
b) CHF INR**

Q2. A) The following quotes are available in New York: (8)

EUR USD 1.1180 / 1.1195

USD JPY 155.2000 / 155.2500

i) Calculate EUR JPY cross rate.

ii) If the Tokyo market quotes 173.50 / 173.80, examine whether triangular arbitrage is possible.

iii) Show full arbitrage steps.

Q2. B) Calculate the forward buying and selling rates from the following information: (7)

EUR INR 99.6200 / 99.7000

One Month forward 800/950

Two Months Forward 1100/1300

Three Months Forward 1500/1750

Q3. Write Short Notes: (15)

1. Cross Currency Rate
2. Covered Interest Arbitrage
3. Role of RBI in Foreign Exchange Market

FY

BACHELOR OF BANKING AND INSURANCE (BBI)

END OF SECOND SEMESTER EXAMINATION MARCH 2026

MINOR: INTRODUCTION TO DIGITAL MARKETING

NB: (a) Attempt Any 2 out of 3

DURATION: 1 Hrs

(b) Figures to the right indicate full marks.

MARKS: 30

Q.1 Answer the following (15 Marks)

- a) Explain the fundamentals of Digital Marketing and differentiate between Traditional Marketing and Digital Marketing. (07 Marks)
- b) Trace the evolution of Digital Marketing and examine the Digital Marketing landscape in India. Discuss the key drivers influencing digital growth and the expectations of Gen Y and netizens in the digital ecosystem. (08 Marks)

Q.2 Answer the following (15 Marks)

- a) Explain the concept of Digital Marketing Strategy and describe the stages of the Consumer Decision Journey. (07 Marks)
- b) Discuss the importance of market segmentation and message customization in digital campaigns. Analyze the structure of the Digital Advertising Market in India and outline the essential skills required for digital marketing professionals. (08 Marks)

Q.3 Answer the following (15 Marks)

- a) Explain Email Marketing and Mobile Marketing along with their significance in modern business. (07 Marks)
- b) Discuss various digital advertising tools and ad placement techniques. Prepare a brief Digital Marketing Plan for launching a new product in the Indian market. (08 Marks)

B.COM. (BANKING AND INSURANCE)

END OF SECOND SEMESTER EXAMINATION MARCH 2026

VES:Environmental Management & Sustainable Development – II DURATION: 1 Hr.

Marks: 30 Marks

NB: (a) Attempt any 3 out of 4.

(b) Figures to the right indicate full marks.

- Q1.** Define environmental pollution. Explain different types of pollutants with suitable examples. (10)
- Q2.** Analyze the causes, impacts, and control measures of water pollution. (10)
- Q3.A)** Explain the 3R principle in waste management. (5)
- Q3.B)** Discuss the importance of ISO 14001 in Environmental Management Systems. (5)
- Q4.** Design an action plan for reducing environmental pollution at the college campus level. (10)
-